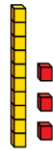


Flashback 4


Year 2 | Week 6 | Day 1

1) Work out $49 - 30$

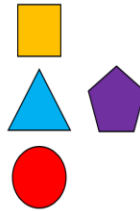


2) Complete the number bond $20 + \square = 100$

3) Use $<$, $>$ or $=$ to compare the counters.



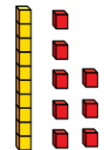
4) Which shape is below the triangle?



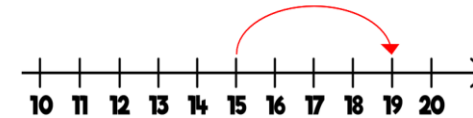
Flashback 4

Year 2 | Week 6 | Day 2

1) Add together 37 and 6



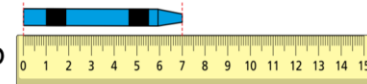
2) What is 4 more than 15?



3) What could the missing digit be?

$$37 > _9$$

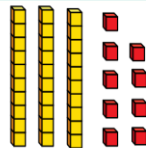
4) How long is the crayon?



Flashback 4

Year 2 | Week 6 | Day 3

1) What is 9 more than 43?

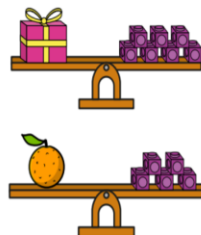


2) What is 10 more than 43?

3) Write the numbers in order, starting with the smallest.

63 36 93

4) All the cubes weigh the same. Which is lighter, the present or the orange?



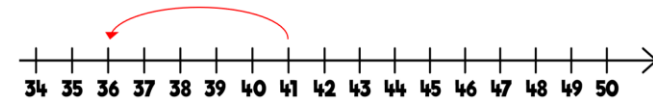
Flashback 4

Year 2 | Week 6 | Day 4

1) Work out $41 - 5$



2) What is 30 plus 49?



3) Complete the number track.

0	3			12		18			27
---	---	--	--	----	--	----	--	--	----

4) How many spots are there in total?

